

Campus School IITK.
Summer Holiday Homework 2024-25
Class-II

Activity

- Read the chapter 'Between Home and School' and in half a chart paper draw all the things you see while coming to school. Colour the pictures and write their name below.

For learning

- Learn the list of Singular/Plural according to the spelling rule (s, es, ies) as done in the class.
- Also learn the list of gender given in the class and from Route to Grammar (Page no. - 26)

Suggested reading

- Read a short English story during the vacation and share it with your friends after coming back to school.

Written work

- Do pages - 3, 7 and 8 from English worksheet as instructed in the class.

हिन्दी - * पाठ्य पुस्तक में दी गई कविता को याद करें।

कविता → माँ, घर, टिल्लू जी और तीन दोस्तों की कहानी को पढ़ें।

- * गमियों की छुट्टियों में आप कहाँ गये और कैसे बिताई इसके बारे में पाँच वाक्य अपनी हिन्दी की पुस्तिका में लिखें।

Maths - Do the given worksheet.

EVS

- Do chapter 2 and 6 in your EVS worksheet.
- Revise chapter 1, 2 and 6.
- Everyday do your favourite exercise like yoga, dance, skipping etc.
- Place a bowl of water for birds and help your mother during folding clothes.
- Water plants in your garden and observe their growth.

Class 2, Maths

H.HW

Q.1 Fill in the missing numerals :

- (a) 195 199
- (b) 223 227
- (c) 393 400

Q.2 Write the numerals for each of the following:

- (a) Three hundred forty-seven =
- (b) Nine hundred fifty-nine =
- (c) Seven hundred seventy-eight =
- (d) One hundred nine =

Q.3 Write the number names for each of the following :

- (a) 101 = _____
- (b) 955 = _____
- (c) 889 = _____
- (d) 240 = _____

Q.4 Write the number which comes just before :

(a) 185

(b) 799

(c) 520

(d) 215

Q.5 Write the number which comes just after:

(a) 677

(b) 899

(c) 294

(d) 802

Q.6 Write the number which comes in between :

(a) 501 503

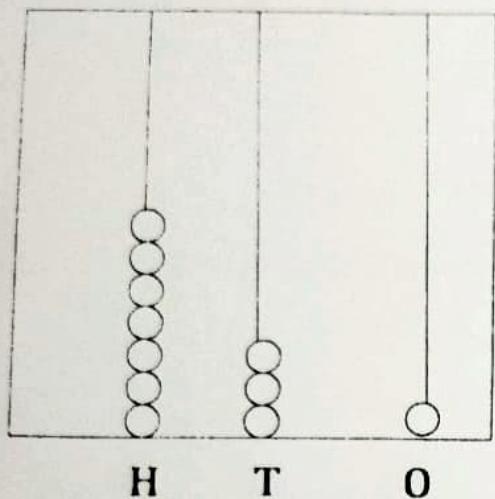
(2) 982 984

(3) 250 252

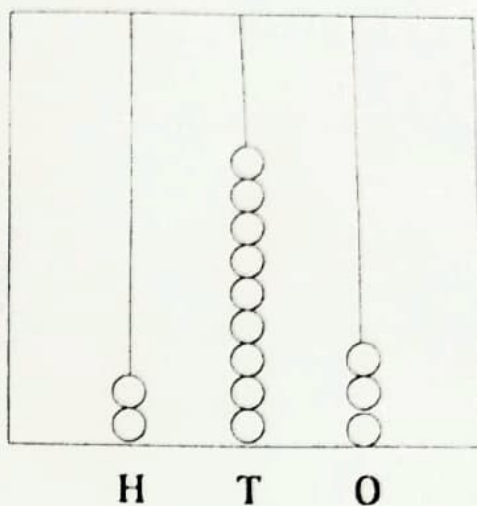
(4) 445 447

Q.7 Read the numbers shown on the abacus and fill in the placeholders and write their number names:

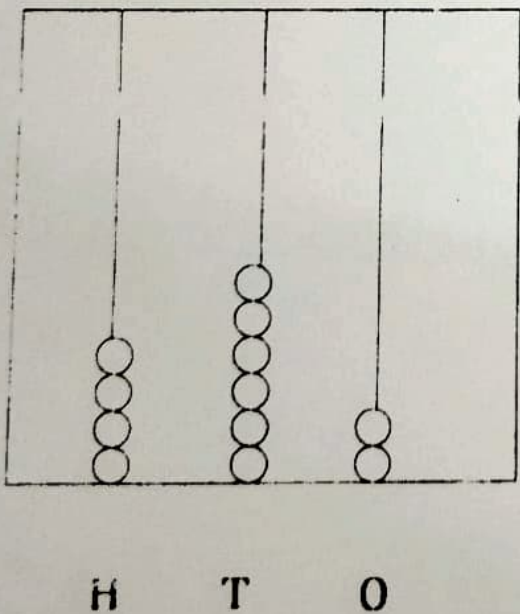
(a)



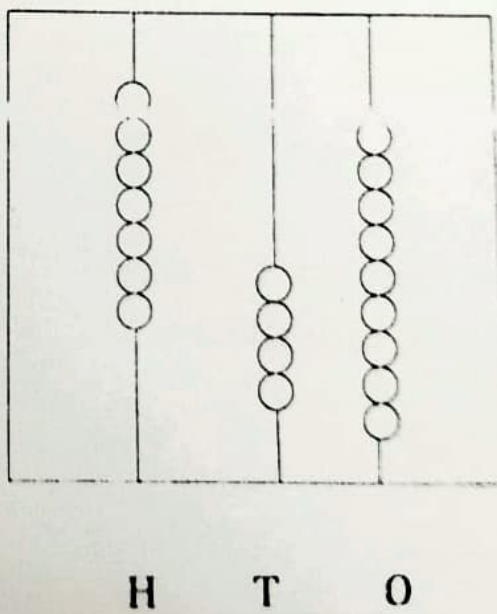
(b)



(c)



(d)



Q.8 Fill in the place holders :

(a) In 423, 4 is at place.

Its place value is

(b) In 773, 3 is at place.

Its place value is

(c) In 873, 7 is at place.

Its place value is

Q.9 Write each of the following in expanded form:

(a) $670 = \square + \square + \square$

(b) $829 = \square + \square + \square$

Q.10 Write each of the following in short form :

(a) $200 + 70 + 3 = \square$

(b) $300 + 40 + 7 = \square$

Q.11 Compare the numbers and put the sign $>$, $=$ or $<$ in the placeholders :

(a) $544 \square 546$

(b) $909 \square 911$